


RODEA TODAS LAS LETRAS b:

p q d b e p e p b e p q d b e p
 n g b n w n W n n w n g b n w n
 b e p q d b n p e p q p d p n q d b n
 n w n g b e p n d b n d b n b e p n
 p q d b n w n d b n d b n b e p n
 n g b n w b n w n n w n g b n w n
 p q d b e p e p b e p q d b e p
 n g b n w b n w n n w n g b n w n
 b e p q d b n p e p q p q n w n g b n
 n w n g b n w n d b n d b n p n q d b e p
 n g b n w n d b n d b n p n g b n w n


EMPEZANDO EN 455, CONTA POR INCREMENTOS DE 4, Y COMPLETA LOS NÚMEROS QUE FALTAN.

	459				475				
495	499					519			
			547		555				571
575			587	591					611
			627	631			643		
		663		671			683	687	
695									
								767	771
	819						843		


DIBUJA LAS HORAS EN EL RELOJ Y DI CUANTO TIEMPO PASA ENTRE LA PRIMERA Y LA SEGUNDA HORA:



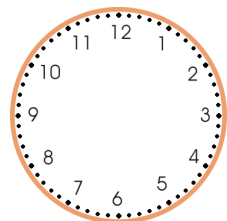
08:50




13:40




11:45




16:10




20:35



23:45



05:35



11:25